

Counting in 4s



Name: _____

- Complete the counting in 4s number track...

0	4	8										
48	44											

- Draw a line through each 'counting in 4s' number maze...

0	3	6	10	34
4	8	12	13	29
10	20	16	46	50
25	24	36	40	44
30	28	32	45	48

0	3	6	10	38
4	2	26	32	36
8	20	24	28	40
12	16	26	46	44
17	18	29	50	48

48	44	40	36	38
46	25	26	32	34
22	20	24	28	31
23	16	9	7	3
14	12	8	4	0

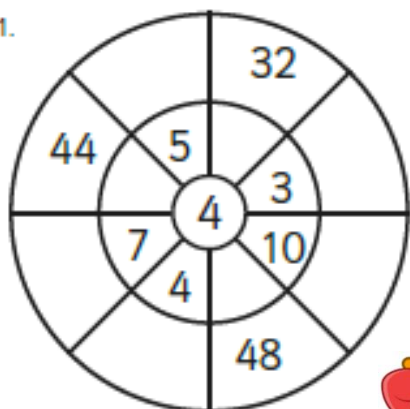
48	45	38	42	46
44	40	36	39	10
47	43	32	35	7
20	24	28	30	5
16	12	8	4	0

- Write the other 'counting in 4s' number in each pair.

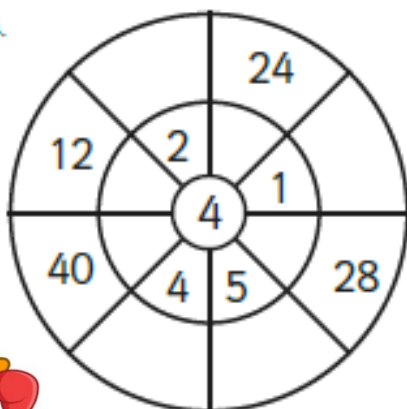
	20	44			28	8			36
20			8	28			44	12	

4 Times Table Multiplication Wheels

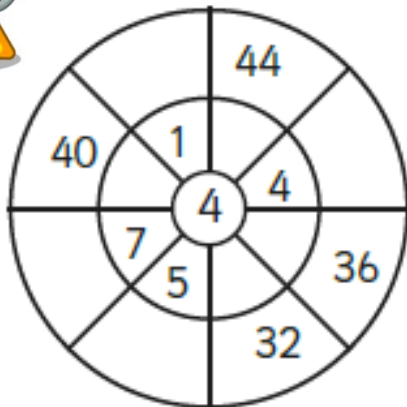
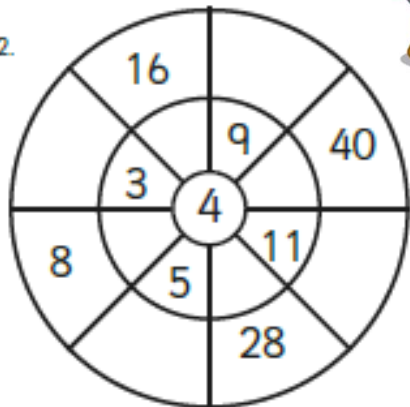
1.



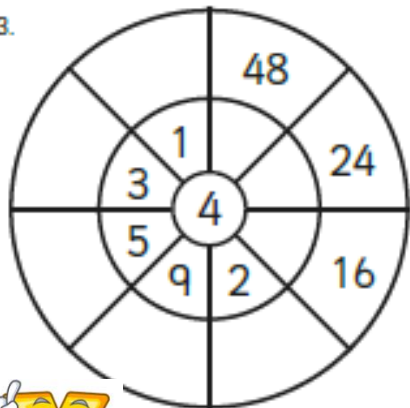
4.



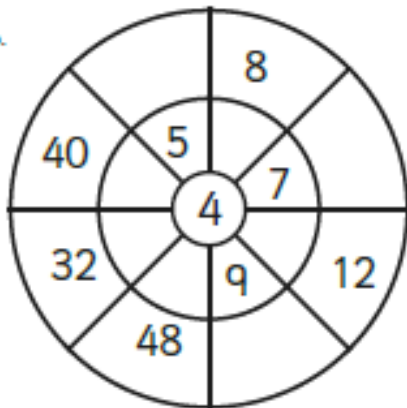
2.



3.




6.





Mad Maths Minutes

4x Table Visual Set A





$$4 \times 6 = 24$$














4x Table Fact Family Arrays



$2 \times 4 = 8$

$4 \times 2 = 8$

$8 \div 4 = 2$

$8 \div 2 = 4$

