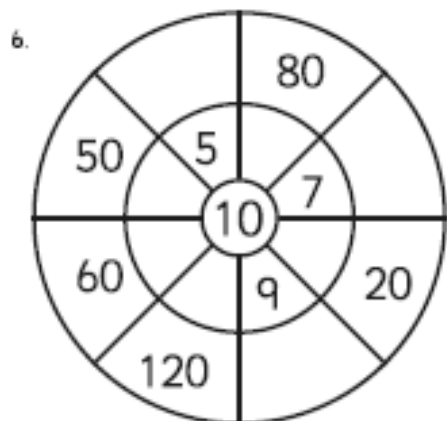
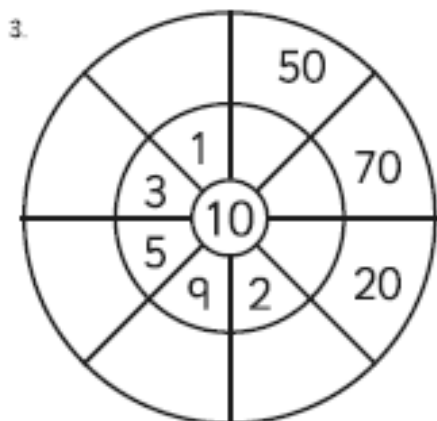
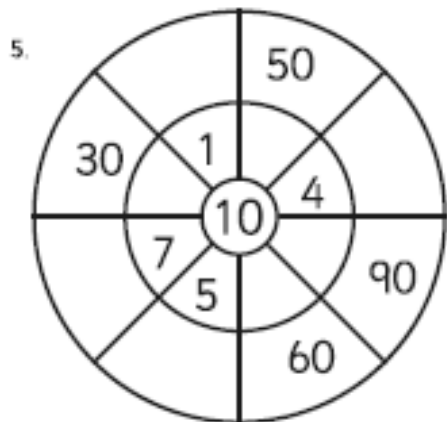
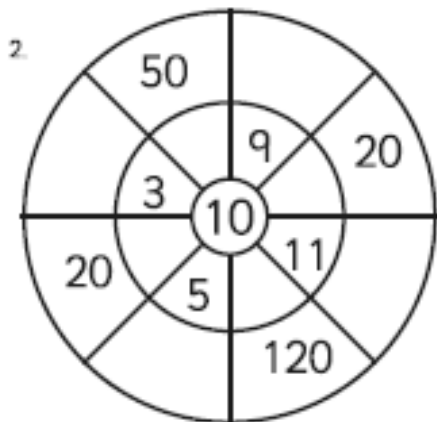
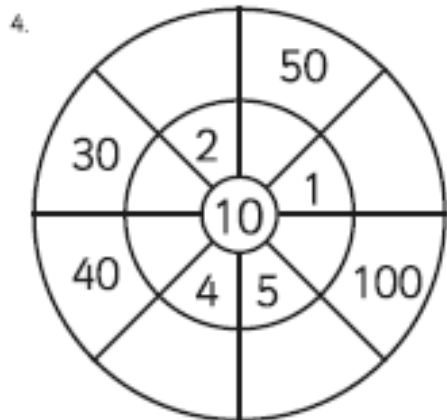
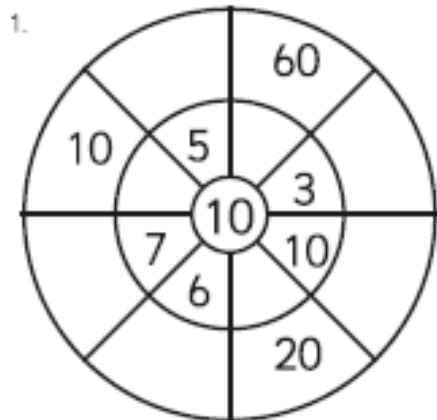


10 Times Table Multiplication Wheels



Counting in 10s



Name: _____

Date: _____

- Complete the counting in 10s number track...

0	10	20										
---	----	----	--	--	--	--	--	--	--	--	--	--

120	110											
-----	-----	--	--	--	--	--	--	--	--	--	--	--

- Draw a line through each 'counting in 10s' number maze...

0	2	54	65	78
10	36	50	60	70
20	30	40	90	80
29	33	45	100	110
35	41	66	107	120

0	10	18	21	115
3	20	25	39	122
59	30	34	105	116
50	40	47	100	110
60	70	80	90	120

120	103	52	61	75
110	100	49	35	57
97	90	40	30	34
85	80	50	20	28
76	70	60	10	0

120	110	100	104	48
93	96	90	99	101
75	70	80	88	92
50	60	65	17	25
40	30	20	10	0

- Write the other 'counting in 10s' number in each pair.

70			20	90			120	40	
	40	80			60	20			70

Counting in 10s Set A

70, 80, _____ 0, 10, _____

20, 30, _____ 30, 40, _____

80, 90, _____ 10, 20, _____

40, 50, _____ 70, 80, _____

10, 20, _____ 0, 10, _____

50, 60, _____ 50, 60, _____

80, 90, _____ 80, 90, _____

0, 10, _____ 20, 30, _____

30, 40, _____ 60, 70, _____

Counting in 10s Set B

80, 90, _____ 40, 50, _____

0, 10, _____ 20, 30, _____

40, 50, _____ 60, 70, _____

10, 20, _____ 10, 20, _____

80, 90, _____ 30, 40, _____

30, 40, _____ 70, 80, _____

70, 80, _____ 20, 30, _____

0, 10, _____ 50, 60, _____

50, 60, _____ 0, 10, _____

10x Table Pictures Set A

