

Work out these answers:

a) $2 \times 9 =$ _____

d) $8 \times 9 =$ _____

b) $3 \times 9 =$ _____


e) $12 \times 9 =$ _____

c) $5 \times 9 =$ _____

f) $9 \times 9 =$ _____


How many blocks are there?

a)  _____ \times _____ = _____

b)  _____ \times _____ = _____

c)  _____ \times _____ = _____

9x Table Fact Family Arrays





$2 \times 9 = 18$

$9 \times 2 = 18$

$18 \div 9 = 2$

$18 \div 2 = 9$



- Complete the counting in 9s number track...

0	9	18										
---	---	----	--	--	--	--	--	--	--	--	--	--

108	99											
-----	----	--	--	--	--	--	--	--	--	--	--	--

- Draw a line through each 'counting in 9s' number maze...

0	9	18	28	105
26	17	27	35	98
44	45	36	81	90
61	54	63	72	99
70	65	71	80	108

0	23	31	95	104
9	16	95	88	97
18	25	89	81	90
27	37	82	72	99
36	45	54	63	108

108	65	53	44	53
99	54	45	35	26
90	63	36	27	19
81	72	26	18	9
91	79	35	28	0

108	99	107	46	51
100	90	44	38	44
91	81	36	27	35
83	72	45	18	20
71	63	54	9	0

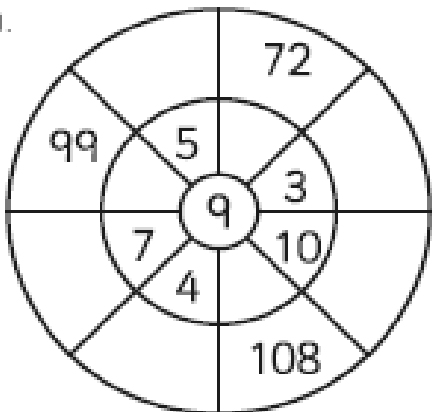
- Write the other 'counting in 9s' number in each pair.

27			99	45			18	63	
----	--	--	----	----	--	--	----	----	--

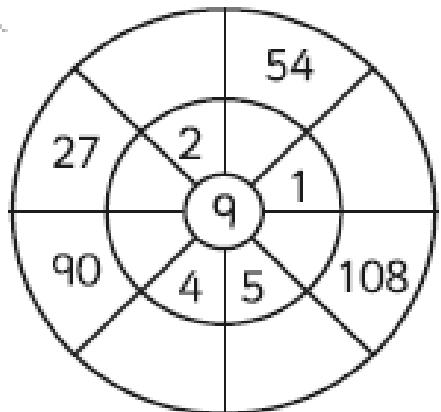
	45	18			63	72			9
--	----	----	--	--	----	----	--	--	---

9 Times Table Multiplication Wheels

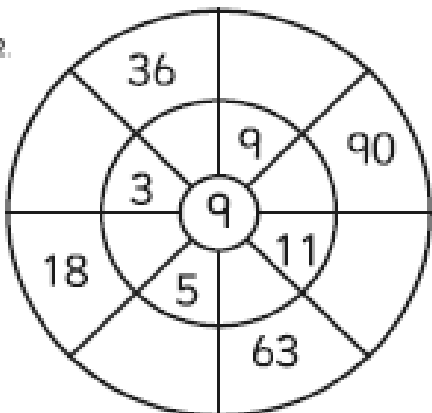
1.



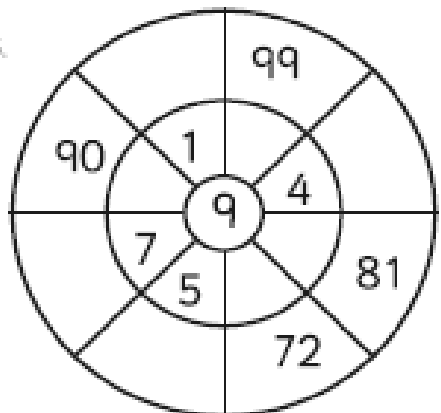
4.



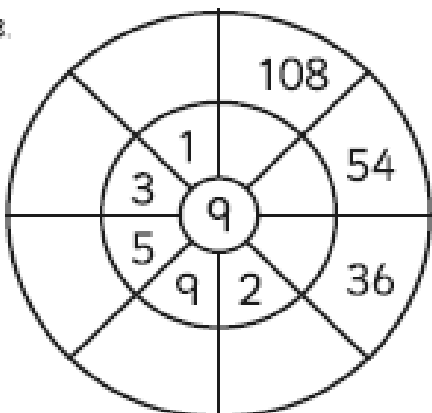
2.



5.



3.



6.

